

4. Logarithmic and general transformations

4.1. Logarithmic-transformations, logarithmic plots

PROBLEM 1

Mark the following points in logarithmic, double-logarithmic and loglinear coordinate systems, if possible.

- $\{0,2\}, \{0.5,0.2\}, \{0.5,1.5\}, \{2.2,10\}, \{3.5,15\},$
- $\{1,1.5\}, \{0,0.5\}, \{0.6,5.5\}, \{1.5,10\}, \{3,1\}$
- $\{0.1,1\}, \{0.5,0.2\}, \{0.5,3\}, \{1.2,12\}, \{3,24\}.$
- $\{0,2\}, \{0.5,0.2\}, \{0.5,1.5\}, \{2.2,10\}, \{3.5,15\},$
- $\{1,1.5\}, \{0,0.5\}, \{0.6,5.5\}, \{1.5,10\}, \{3,1\},$
- $\{0.1,1\}, \{0.5,0.2\}, \{0.5,3\}, \{1.2,12\}, \{3,24\}.$

PROBLEM 2

Transform either the x or y to straighten the graph of the following functions and plot it in an appropriate logarithmic system.

a) $y = 3^{2x-1}$ b) $y = e^{-2x+2}$ c) $y = 0,5 \cdot 4^x$ d) $y = 3 - 3 \cdot \lg x$ e) $y = 0,5 \cdot x^{2,5}$

PROBLEM 3

Transform y and plot it in a logarithmic system.

a) $y = 3^{x^2-1}$ b) $y = 2^{\sin x+1}$ c) $y = 10^{1-\cos x}$ d) $y = \exp(2^x-1)$ e) $y = e^{-\text{ctg } x}$

PROBLEM 4

Use logarithmic transformation for x and/or y to straighten the following function, and plot it in an appropriate logarithmic system.

a) $y = 3^{2x-1}$ b) $y = e^{-2x+2}$ c) $y = 0,5 \cdot 4^x$ d) $y = 3 - 3 \cdot \lg x$ e) $y = 0,5 \cdot x^{2,5}$

PROBLEM 5

Transform y and plot it in a logarithmic system.

a) $y = 3^{x^2-1}$ b) $y = 2^{\sin x+1}$ c) $y = 10^{1-\cos x}$ d) $y = \exp(2^x-1)$ e) $y = e^{-\operatorname{ctg} x}$

PROBLEM 6

Transform either the x or y to straighten the graph of the following functions and plot it in an appropriate logarithmic system. Mark the given points in the same system.

a) $y = 2^{-0,5x-2}$, $(x;y): (0;1), (1;0,25), (2;2), (-1;4), (3, -10), (0;0), (-1;3), (4;0,4)$

b) $y = 10^{x-3}$, $(x;y): (0;1), (1;0,1), (2;2), (-2;100), (3, -10), (0;0), (-1;3), (4;4)$

c) $y = 3^{2x-1}$, $(x;y): (0;1), (1;0,1), (2;2), (-2;100), (3, -10), (0;0), (-1;3), (4;4)$

d) $y = e^{-2x+2}$, $(x;y): (0;1), (1;0,3), (2;e), (-2;1/e^2), (3, -10), (0;0), (-1;3), (4;4)$

e) $y = 3 - 3 \cdot \lg x$, $(x;y): (0;1), (1;0,1), (2;2), (-2;100), (-3, -e), (0;0), (-1;3), (4;4)$

f) $y = \log_2 x^3$, $(x;y): (0;1), (1;0,1), (2;2), (-2;100), (3, -10), (0;0), (-1;3), (4;4)$

g) $y = 0,5 \cdot x^{2,5}$, $(x;y): (0;1), (1;0,5), (2;2), (-2;100), (3, -10), (0;0), (-1;3), (4;4)$

h) $y = \frac{e}{x^2}$, $(x;y): (0;1), (1;0,2), (2;e), (-2;1/e^2), (3, -e), (0;0), (-1;3), (4;4)$

PROBLEM 7

Transform either the y to straighten the graph of the following functions and plot it in an appropriate logarithmic system. Mark the given points in the same system.

a) $y = 3^{x^2-1}$, $(x;y): (0;1), (1;0,01), (2;2), (-2;100), (3, -10), (0;0), (-1;3), (4;4)$

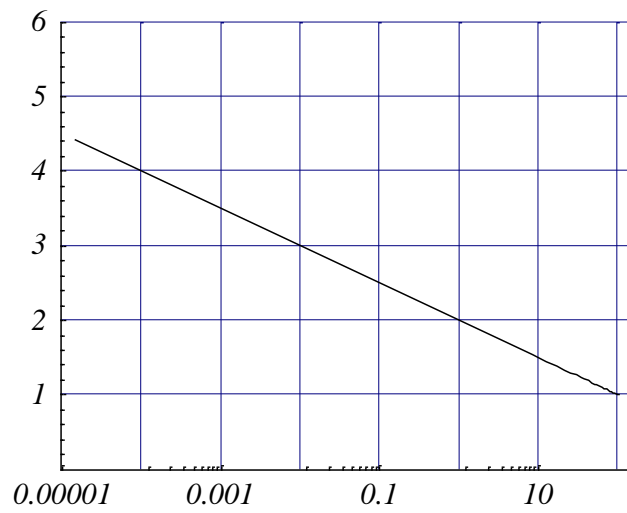
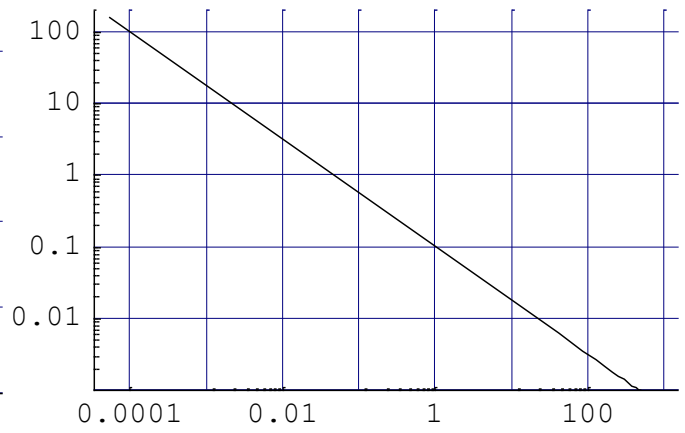
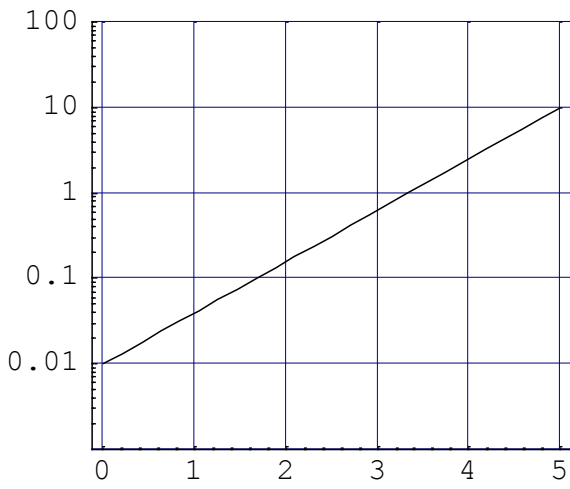
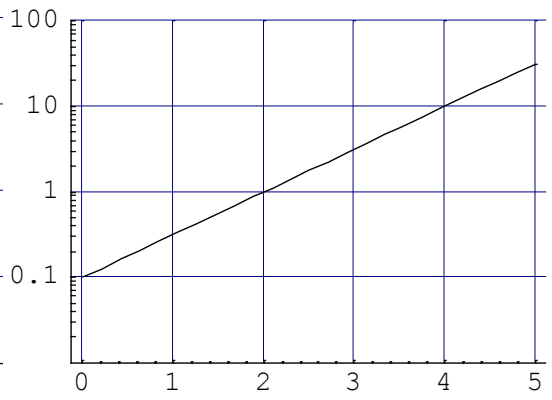
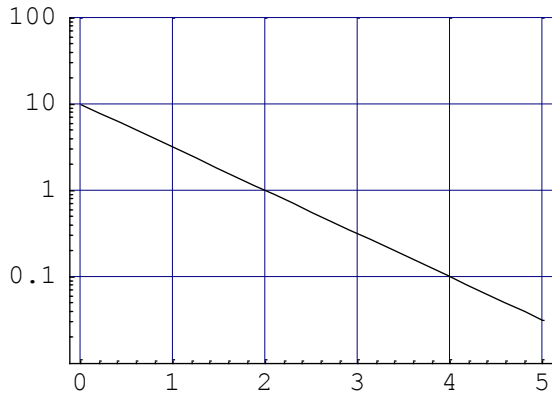
b) $y = 2^{\sin x+1}$, $(x;y): (0;1), (1;0,5), (2;2), (-2;100), (3, -10), (0;0), (-1;3), (4;4)$

c) $y = 10^{1-\cos x}$, $(x;y): (0;1), (1;0,01), (2;2), (-2;100), (3, -10), (0;0), (-1;3), (4;4)$

d) $y = \exp(2^x-1)$, $(x;y): (0;1), (1;0,01), (2;e), (-2;1/e^2), (3, -10), (0;0), (-1;3), (4;4)$

PROBLEM 8

Find the formula for the following functions:



4.2. General nonlinear transformations

PROBLEM 9

Plot the following function:

$$f(x) := \frac{1}{(x-1)(x-2)}$$

PROBLEM 10

Plot the absolute value of the following function:

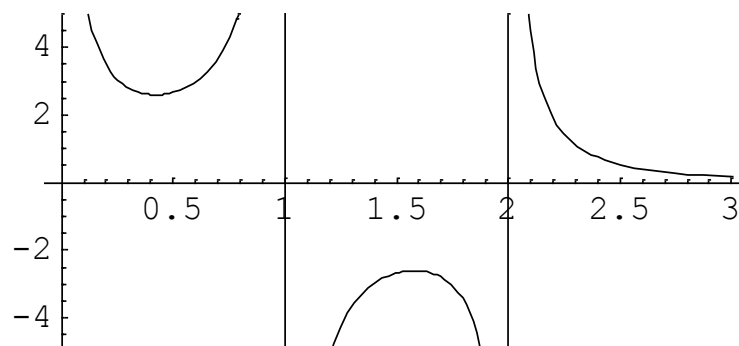
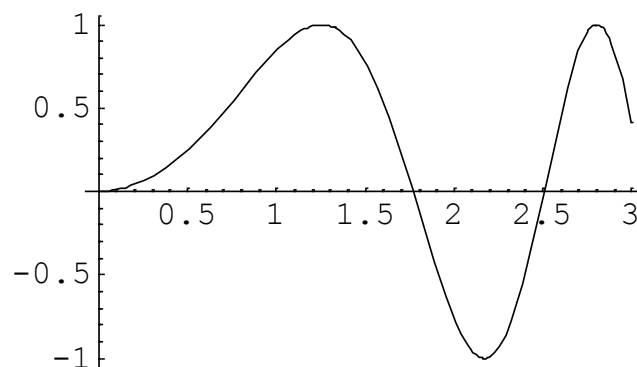
$$g(x) := \log_2(x);$$

$$g(x) := (x+2)(x-1)(x-3);$$

$$g(x) := \sin(x);$$

$$g(x) := \tan(x);$$

$$g(x) := \frac{x-1}{x-2};$$



PROBLEM 11

Plot the following function:

$$f(x) := \frac{1}{(x-1)(x-2)^2(x-3)}$$

PROBLEM 12

Plot $1/f(x)$ for the following functions:

$$f(x) := x^3 - 1; \quad g(x) := \log_{\frac{1}{2}}(x);$$

$$f(x) := 2^{(x+1)}; \quad g(x) := (1 - x^2)(x - 2);$$

$$f(x) := x^2 \cos(x); \quad g(x) := \sin(x);$$

PROBLEM 13

Plot the following functions:

$$f(x) := \sin\left(\frac{1}{x}\right);$$

$$f(x) := \tan(x); \quad g(x) := \cos(3x);$$

$$f(x) := \cos\left(\frac{1}{x}\right); \quad g(x) := x^3 - 1;$$

$$f(x) := \sqrt{x} + 3; \quad g(x) := \sqrt[3]{x - 1};$$

$$f(x) := \log_3(x); \quad g(x) := \log_3(-x);$$

$$f(x) := 2^{-x}; \quad g(x) := 2^x;$$

PROBLEM 14

Plot the graph of $f(|x|)$, $f(1/x)$ and $f(x)^2$, if the graph of $f(x)$ is:

